



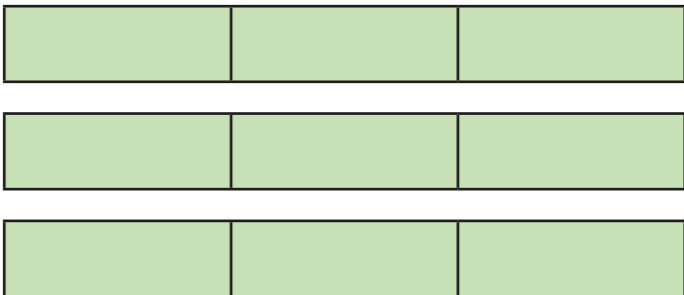
Subtract from whole amounts

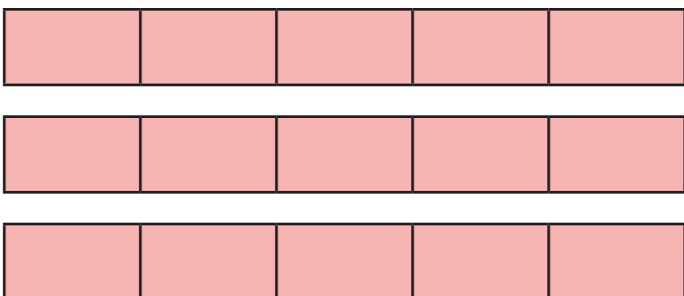


1 Use the bar models to help you subtract the fractions.

a)  $2 - \frac{2}{3} = \square$

b)  $2 - \frac{5}{3} = \square$

c)  $3 - \frac{5}{3} = \square$

d)  $3 - \frac{8}{5} = \square$

2 Complete the subtractions.

a) $\frac{8}{8} - \frac{5}{8} = \square$

d) $2 - \frac{5}{7} = \square$

b) $1 - \frac{5}{8} = \square$

e) $4 - \frac{5}{7} = \square$

c) $2 - \frac{5}{8} = \square$

f) $4 - \frac{7}{5} = \square$

3 Match the numbers with a difference of $\frac{3}{4}$

3

$2\frac{3}{4}$

1

$\frac{1}{4}$

2

$\frac{9}{4}$

4 Aisha has 4 pies.




a) Aisha gives $\frac{5}{8}$ of a pie to Mo.
How many pies does Aisha have left?

Aisha has whole pies and of a pie left.

b) Aisha then gives 2 pies to Jack.
Calculate the difference between how much pie Aisha now has and how much pie Mo has.

5 Alex is subtracting fractions.



Explain why Alex is incorrect.



6 Complete the calculations.


a) $3 - \square = 2\frac{3}{10}$

c) $\square - \frac{7}{12} = 3\frac{5}{12}$

b) $4 - \square = 3\frac{3}{8}$

d) $\square - \frac{5}{12} = 13\frac{7}{12}$

7 Teddy has 4 litres of juice and 3 jugs.



Teddy pours $\frac{3}{4}$ of a litre into each jug.
How much juice does Teddy have left?

Teddy has litres of juice left.