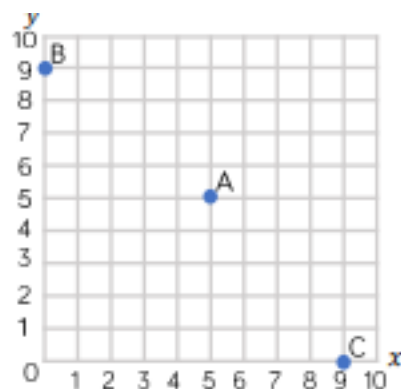
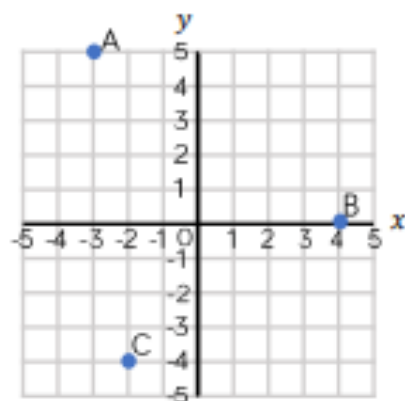


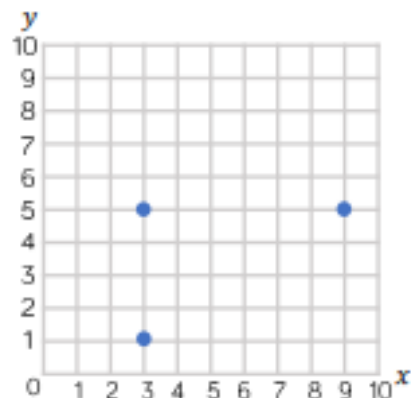
Whitney plots three coordinates.  
Write down the coordinates of  
points A, B and C.



Dora plotted three coordinates.  
Write down the coordinates of  
points A, B and C.



Tommy is drawing a rectangle on a grid.  
Plot the final vertex of the rectangle.  
Write the coordinate of the final  
vertex.



Draw a shape using the coordinates  
(-2, 2), (-4, 2), (-2, -3) and (-4, -2).  
What is the name of shape?

